

3472/1  
**ADDITIONAL  
 MATHEMATICS  
 KERTAS 1  
 OKTOBER 2020  
 2 JAM**

NO KAD PENGENALAN

--	--	--	--	--	--	--	--	--	--	--	--	--	--	--	--	--	--	--	--	--	--	--

Nama Pelajar : .....

Tingkatan : .....



**MAJLIS PENGETUA SEKOLAH MALAYSIA (MPSM)  
 (CAWANGAN KELANTAN)**

**PEPERIKSAAN  
 PERCUBAAN SPM  
 TINGKATAN 5  
 2020**

**ADDITIONAL MATHEMATICS  
 KERTAS 1**

**MASA : DUA JAM**

1. *Tulis nombor kad pengenalan anda pada petak yang disediakan.*
2. *Kertas ini adalah dalam dwibahasa.*
3. *Soalan dalam Bahasa Inggeris mendahului soalan yang sepadan dalam Bahasa Melayu.*
4. *Calon dibenarkan menjawab keseluruhan atau sebahagian soalan sama ada dalam Bahasa Inggeris atau Bahasa Melayu.*
5. *Calon dikehendaki membaca maklumat di halaman belakang kertas soalan ini.*

UNTUK KEGUNAAN GURU		
Soalan	Markah Penuh	Markah Diperoleh
1	3	
2	3	
3	2	
4	4	
5	3	
6	3	
7	3	
8	3	
9	2	
10	3	
11	3	
12	4	
13	2	
14	2	
15	3	
16	2	
17	4	
18	4	
19	4	
20	3	
21	4	
22	4	
23	4	
24	4	
25	4	
Jumlah	80	

Kertas soalan ini mengandungi **30** halaman bercetak

## ALGEBRA

$$1 \quad x = \frac{-b \pm \sqrt{b^2 - 4ac}}{2a}$$

$$2 \quad a^m \times a^n = a^{m+n}$$

$$3 \quad a^m \div a^n = a^{m-n}$$

$$4 \quad (a^m)^n = a^{mn}$$

$$5 \quad \log_a mn = \log_a m + \log_a n$$

$$6 \quad \log_a \frac{m}{n} = \log_a m - \log_a n$$

$$7 \quad \log_a m^n = n \log_a m$$

$$8 \quad \log_a b = \frac{\log_c b}{\log_c a}$$

$$9 \quad T_n = a + (n-1)d$$

$$10 \quad S_n = \frac{n}{2}[2a + (n-1)d]$$

$$11 \quad T_n = ar^{n-1}$$

$$12 \quad S_n = \frac{a(r^n - 1)}{r - 1} = \frac{a(1 - r^n)}{1 - r}, r \neq 1$$

$$13 \quad S_\infty = \frac{a}{1 - r}, |r| < 1$$

CALCULUS  
KALKULUS

$$1 \quad y = uv, \frac{dy}{dx} = u \frac{dv}{dx} + v \frac{du}{dx}$$

$$2 \quad y = \frac{u}{v}, \frac{dy}{dx} = \frac{v \frac{du}{dx} - u \frac{dv}{dx}}{v^2}$$

$$3 \quad \frac{dy}{dx} = \frac{dy}{du} \times \frac{du}{dx}$$

$$4 \quad \text{Area under a curve} \\ \text{Luas di bawah lengkung} \\ = \int_a^b y \, dx \text{ or (atau)} \\ = \int_a^b x \, dy$$

$$5 \quad \text{Volume of revolution} \\ \text{Isipadu kisanan} \\ = \int_a^b \pi y^2 \, dx \text{ or (atau)} \\ = \int_a^b \pi x^2 \, dy$$

**STATISTICS  
STATISTIK**

$$1 \quad \bar{x} = \frac{\sum x}{N}$$

$$2 \quad \bar{x} = \frac{\sum fx}{\sum f}$$

$$3 \quad \sigma = \sqrt{\frac{\sum (x - \bar{x})^2}{N}} = \sqrt{\frac{\sum x^2}{N} - \bar{x}^2}$$

$$4 \quad \sigma = \sqrt{\frac{\sum f(x - \bar{x})^2}{\sum f}} = \sqrt{\frac{\sum fx^2}{\sum f} - \bar{x}^2}$$

$$5 \quad m = L + \left( \frac{\frac{1}{2}N - F}{f_m} \right) C$$

$$6 \quad I = \frac{Q_1}{Q_0} \times 100$$

$$7 \quad \bar{I} = \frac{\sum W_i I_i}{\sum W_i}$$

$$8 \quad {}^n P_r = \frac{n!}{(n-r)!}$$

$$9 \quad {}^n C_r = \frac{n!}{(n-r)!r!}$$

$$10 \quad P(A \cup B) = P(A) + P(B) - P(A \cap B)$$

$$11 \quad P(X=r) = {}^n C_r p^r q^{n-r}, p+q=1$$

$$12 \quad \text{Mean / Min, } \mu = np$$

$$13 \quad \sigma = \sqrt{npq}$$

$$14 \quad Z = \frac{X - \mu}{\sigma}$$

**GEOMETRY  
GEOMETRI**

$$1 \quad \text{Distance / Jarak} \\ = \sqrt{(x_2 - x_1)^2 + (y_2 - y_1)^2}$$

$$2 \quad \text{Midpoint / Titik tengah} \\ (x, y) = \left( \frac{x_1 + x_2}{2}, \frac{y_1 + y_2}{2} \right)$$

$$3 \quad \text{A point dividing a segment of a line} \\ \text{Titik yang membahagi suatu tembereng garis} \\ (x, y) = \left( \frac{nx_1 + mx_2}{m+n}, \frac{ny_1 + my_2}{m+n} \right)$$

$$4 \quad \text{Area of triangle / Luas segi tiga} \\ = \frac{1}{2} |(x_1 y_2 + x_2 y_3 + x_3 y_1) - (x_2 y_1 + x_3 y_2 + x_1 y_3)|$$

$$5 \quad |\mathbf{r}| = \sqrt{x^2 + y^2}$$

$$6 \quad \hat{\mathbf{r}} = \frac{x\mathbf{i} + y\mathbf{j}}{\sqrt{x^2 + y^2}}$$

**TRIGONOMETRY**  
**TRIGONOMETRI**

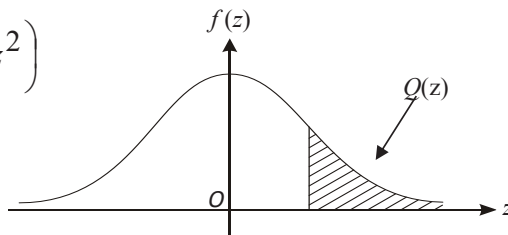
- |   |  |    |  |
|---|--|----|--|
| 1 | Arc length, $s = r\theta$<br><i>Panjang lengkok, <math>s = j\theta</math></i>  | 8  | $\tan 2A = \frac{2 \tan A}{1 - \tan^2 A}$  |
| 2 | Area of sector, $A = \frac{1}{2}r^2\theta$<br><i>Luas sector, <math>L = \frac{1}{2}j^2\theta</math></i>  | 9  | $\sin(A \pm B) = \sin A \cos B \pm \cos A \sin B$<br>$\sin(A \pm B) = \sin A \cos B \pm \cos A \sin B$ |
| 3 | $\sin^2 A + \cos^2 A = 1$<br>$\sin^2 A + \cos^2 A = 1$   | 10 | $\cos(A \pm B) = \cos A \cos B \mp \sin A \sin B$<br>$\cos(A \pm B) = \cos A \cos B \mp \sin A \sin B$ |
| 4 | $\sec^2 A = 1 + \tan^2 A$<br>$\sec^2 A = 1 + \tan^2 A$   | 11 | $\tan(A \pm B) = \frac{\tan A \pm \tan B}{1 \mp \tan A \tan B}$  |
| 5 | $\cos \operatorname{ec}^2 A = 1 + \cot^2 A$<br>$\operatorname{kosek}^2 A = 1 + \operatorname{kot}^2 A$   | 12 | $\frac{a}{\sin A} = \frac{b}{\sin B} = \frac{c}{\sin C}$   |
| 6 | $\sin 2A = 2 \sin A \cos A$<br>$\sin 2A = 2 \sin A \cos A$   | 13 | $a^2 = b^2 + c^2 - 2bc \cos A$<br>$a^2 = b^2 + c^2 - 2bc \cos A$                                       |
| 7 | $\cos 2A = \cos^2 A - \sin^2 A$<br>$= 2\cos^2 A - 1$<br>$= 1 - 2\sin^2 A$<br><br>$\cos 2A = \cos^2 A - \sin^2 A$<br>$= 2\cos^2 A - 1$<br>$= 1 - 2\sin^2 A$ | 14 | Area of triangle / <i>Luas segi tiga</i><br>$= \frac{1}{2} ab \sin C$                                  |

THE UPPER TAIL PROBABILITY  $Q(z)$  FOR THE NORMAL DISTRIBUTION  $N(0,1)$   
 KEBARANGKALIAN Hujung Atas  $Q(z)$  BAGI TABURAN NORMAL  $N(0, 1)$

z	0	1	2	3	4	5	6	7	8	9	Minus / Tolak								
											1	2	3	4	5	6	7	8	9
0.0	0.5000	0.4960	0.4920	0.4880	0.4840	0.4801	0.4761	0.4721	0.4681	0.4641	4	8	12	16	20	24	28	32	36
0.1	0.4602	0.4562	0.4522	0.4483	0.4443	0.4404	0.4364	0.4325	0.4286	0.4247	4	8	12	16	20	24	28	32	36
0.2	0.4207	0.4168	0.4129	0.4090	0.4052	0.4013	0.3974	0.3936	0.3897	0.3859	4	8	12	15	19	23	27	31	35
0.3	0.3821	0.3783	0.3745	0.3707	0.3669	0.3632	0.3594	0.3557	0.3520	0.3483	4	7	11	15	19	22	26	30	34
0.4	0.3446	0.3409	0.3372	0.3336	0.3300	0.3264	0.3228	0.3192	0.3156	0.3121	4	7	11	15	18	22	25	29	32
0.5	0.3085	0.3050	0.3015	0.2981	0.2946	0.2912	0.2877	0.2843	0.2810	0.2776	3	7	10	14	17	20	24	27	31
0.6	0.2743	0.2709	0.2676	0.2643	0.2611	0.2578	0.2546	0.2514	0.2483	0.2451	3	7	10	13	16	19	23	26	29
0.7	0.2420	0.2389	0.2358	0.2327	0.2296	0.2266	0.2236	0.2206	0.2177	0.2148	3	6	9	12	15	18	21	24	27
0.8	0.2119	0.2090	0.2061	0.2033	0.2005	0.1977	0.1949	0.1922	0.1894	0.1867	3	5	8	11	14	16	19	22	25
0.9	0.1841	0.1814	0.1788	0.1762	0.1736	0.1711	0.1685	0.1660	0.1635	0.1611	3	5	8	10	13	15	18	20	23
1.0	0.1587	0.1562	0.1539	0.1515	0.1492	0.1469	0.1446	0.1423	0.1401	0.1379	2	5	7	9	12	14	16	19	21
1.1	0.1357	0.1335	0.1314	0.1292	0.1271	0.1251	0.1230	0.1210	0.1190	0.1170	2	4	6	8	10	12	14	16	18
1.2	0.1151	0.1131	0.1112	0.1093	0.1075	0.1056	0.1038	0.1020	0.1003	0.0985	2	4	6	7	9	11	13	15	17
1.3	0.0968	0.0951	0.0934	0.0918	0.0901	0.0885	0.0869	0.0853	0.0838	0.0823	2	3	5	6	8	10	11	13	14
1.4	0.0808	0.0793	0.0778	0.0764	0.0749	0.0735	0.0721	0.0708	0.0694	0.0681	1	3	4	6	7	8	10	11	13
1.5	0.0668	0.0655	0.0643	0.0630	0.0618	0.0606	0.0594	0.0582	0.0571	0.0559	1	2	4	5	6	7	8	10	11
1.6	0.0548	0.0537	0.0526	0.0516	0.0505	0.0495	0.0485	0.0475	0.0465	0.0455	1	2	3	4	5	6	7	8	9
1.7	0.0446	0.0436	0.0427	0.0418	0.0409	0.0401	0.0392	0.0384	0.0375	0.0367	1	2	3	4	4	5	6	7	8
1.8	0.0359	0.0351	0.0344	0.0336	0.0329	0.0322	0.0314	0.0307	0.0301	0.0294	1	1	2	3	4	4	5	6	6
1.9	0.0287	0.0281	0.0274	0.0268	0.0262	0.0256	0.0250	0.0244	0.0239	0.0233	1	1	2	2	3	4	4	5	5
2.0	0.0228	0.0222	0.0217	0.0212	0.0207	0.0202	0.0197	0.0192	0.0188	0.0183	0	1	1	2	2	3	3	4	4
2.1	0.0179	0.0174	0.0170	0.0166	0.0162	0.0158	0.0154	0.0150	0.0146	0.0143	0	1	1	2	2	2	3	3	4
2.2	0.0139	0.0136	0.0132	0.0129	0.0125	0.0122	0.0119	0.0116	0.0113	0.0110	0	1	1	1	2	2	2	3	3
2.3	0.0107	0.0104	0.0102								0	1	1	1	1	2	2	2	2
			0.00990								3	5	8	10	13	15	18	20	23
				0.00964	0.00939	0.00914					0.00889	0.00866	0.00842						
2.4	0.00820	0.00798	0.00776	0.00755	0.00734						2	5	7	9	12	14	16	16	21
						0.00714	0.00695	0.00676	0.00657	0.00639	2	4	6	8	11	13	15	17	19
2.5	0.00621	0.00604	0.00587	0.00570	0.00554	0.00539	0.00523	0.00508	0.00494	0.00480	2	3	5	6	8	9	11	12	14
2.6	0.00466	0.00453	0.00440	0.00427	0.00415	0.00402	0.00391	0.00379	0.00368	0.00357	1	2	3	5	6	7	9	9	10
2.7	0.00347	0.00336	0.00326	0.00317	0.00307	0.00298	0.00289	0.00280	0.00272	0.00264	1	2	3	4	5	6	7	8	9
2.8	0.00256	0.00248	0.00240	0.00233	0.00226	0.00219	0.00212	0.00205	0.00199	0.00193	1	1	2	3	4	4	5	6	6
2.9	0.00187	0.00181	0.00175	0.00169	0.00164	0.00159	0.00154	0.00149	0.00144	0.00139	0	1	1	2	2	3	3	4	4
3.0	0.00135	0.00131	0.00126	0.00122	0.00118	0.00114	0.00111	0.00107	0.00104	0.00100	0	1	1	2	2	2	3	3	4

$$f(z) = \frac{1}{\sqrt{2\pi}} \exp\left(-\frac{1}{2}z^2\right)$$

$$Q(z) = \int_k^{\infty} f(z) dz$$



Example / Contoh:

If  $X \sim N(0, 1)$ , then  $P(X > k) = Q(k)$

Jika  $X \sim N(0, 1)$ , maka  $P(X > k) = Q(k)$

Jawab **semua** soalan.

1 Given  $\log_x p - \frac{1}{\log_q x^2} = 0$ . Express  $p$  in term of  $q$ .

Diberi  $\log_x p - \frac{1}{\log_q x^2} = 0$ . Ungkapkan  $p$  dalam sebutan  $q$ .

Answer / Jawapan:

[3 marks]  
[3 markah]

1




2 Given  $\log_a b = m$  and  $b(a^{2x}) = \sqrt[3]{b}$ , express  $x$  in terms of  $m$ .

Diberi  $\log_a b = m$  dan  $b(a^{2x}) = \sqrt[3]{b}$  ungkapkan  $x$  dalam dalam sebutan  $m$ .

Answer / Jawapan:

[3 marks]  
[3 markah]

2



For  
Examiner's  
Use

3

The sum of the first  $n$  terms of an arithmetic progression is given by  $S_n = n^2 - 3n$ .

Hasil tambah  $n$  sebutan pertama bagi suatu jangjang aritmetik diberi oleh  $S_n = n^2 - 3n$

Find

Cari

- (a) the value of  $n$  if the sum of the first 10 terms is 70  
*nilai  $n$  jika hasil tambah 10 sebutan pertama ialah 70.*
- (b) the sum of 6<sup>th</sup> term to the 10<sup>th</sup> term.  
*Hasil tambah sebutan ke-6 hingga sebutan ke-10.*

[4 marks]


[4 markah]

Answer / Jawapan:

(a)

(b)

3




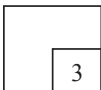
- 4 The first eight terms of a geometric progression are  $T_1, T_2, T_3, T_4, T_5, T_6, T_7, T_8 \dots$ . Given the sum to infinity of the odd terms is  $\frac{27}{4}$  and the sum to infinity of the even terms is  $\frac{9}{4}$ . Find the first term and common ratio.

*Lapan sebutan pertama jangjang geometri ialah  $T_1, T_2, T_3, T_4, T_5, T_6, T_7, T_8 \dots$ . Diberi hasil tambah ketakterhinggaan bagi sebutan ganjil ialah  $\frac{27}{4}$  dan hasil tambah ketakterhinggaan bagi sebutan genap ialah  $\frac{9}{4}$ . Cari sebutan pertama dan nisbah sepunya.*

[3 marks]  
[3 markah]

Answer / Jawapan:

4





5

Diagram 5 shows a graph of a quadratic function  $f(x) = -(x+1)^2 + 5$  that has the maximum point of  $(-1, k)$ .

Rajah 5 menunjukkan satu graf fungsi kuadratik  $f(x) = -(x+1)^2 + 5$  yang mempunyai titik maksimum  $(-1, k)$ .

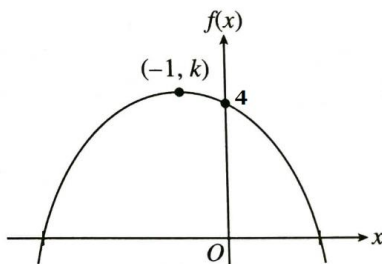


Diagram 1

Rajah 1

(a) Find the value of  $k$ .

*cari nilai  $k$*

(b) Function  $g(x)$  is produced when the function  $f(x)$  is reflected on the  $y$ -axis. Find the function  $g(x)$ .

Fungsi  $g(x)$  terhasil apabila fungsi  $f(x)$  dipantulkan pada paksi- $y$ . tentukan fungsi  $g(x)$ .


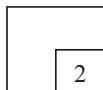
[2 marks]  
[2 markah]

Answer / Jawapan:

(a)

(b)

5



- 6 If the quadratic equation  $(m+3)x^2 + 2m = 12x$  has real roots, determine the range of values of  $m$ .


*Jika persamaan kuadratik  $(m+3)x^2 + 2m = 12x$  mempunyai punca-punca nyata, tentukan julat nilai  $m$ .*

[3 marks]

[3 markah]

Answer / Jawapan:

6



7

Diagram 2.1 shows the non-linear graph represented by the equation  $y = 3x^3 + px$ .  
The non-linear equation is reduced to form a linear graph in Diagram 2.2 with y-intercept = 2 and in Diagram 2.3 with y-intercept =  $2p - q$

*Rajah 2.1 menunjukkan graf tak linear yang diwakili oleh persamaan  $y = 3x^3 + px$ .  
Persamaan tak linear tersebut diturunkan untuk membentuk graf linear pada Rajah 2.2 dengan pintasan-y=2 dan pada Rajah 2.3 dengan pintasan-y =  $2p - q$*

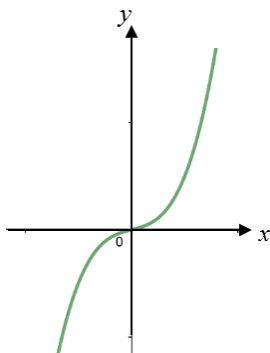


Diagram 2.1

Rajah 2.1

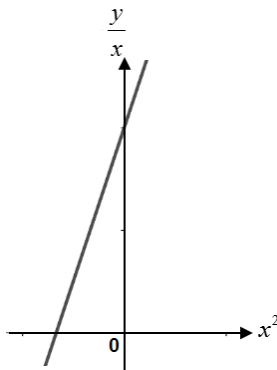


Diagram 2.2

Rajah 2.2

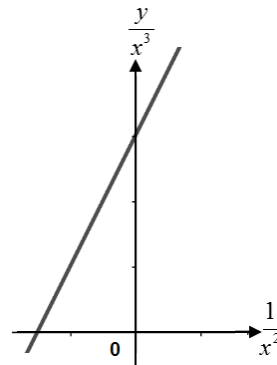


Diagram 2.3

Rajah 2.3


Find the value of  $p$  and of  $q$   
*Cari nilai  $p$  dan nilai  $q$ .*

[4 marks]

[4 markah]

Answer / Jawaban:

7



- 8 Diagram 3 shows a graph of a function  $g(x)$ .

Rajah 3 menunjukkan graf bagi fungsi  $g(x)$

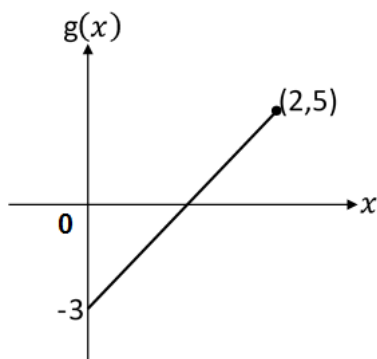


Diagram 3

Rajah 3

- (a) If the range of  $g(x)$  for the domain  $0 \leq x \leq 2$  is  $-3 \leq g(x) \leq \frac{m}{2}$ . Determine the value of  $m$

Jika julat bagi  $g(x)$  untuk domain  $0 \leq x \leq 2$  ialah  $-3 \leq g(x) \leq \frac{m}{2}$ . Tentukan nilai  $m$

- (b) Determine the function  $g^{-1}(x)$ .

Tentukan fungsi  $g^{-1}(x)$ .

[3 marks]

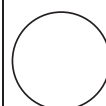
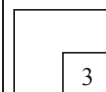
[3 markah]

Answer / Jawapan:

- (a) .

- (b)

8



9

Given  $f(x) = \frac{m}{3x-n}, x \neq \frac{1}{3}$

Diberi  $f(x) = \frac{m}{3x-n}, x \neq \frac{1}{3}$

(a) State the value of  $n$

*Nyatakan nilai  $n$*

(b) If  $3f(-1) + f(1) = -1$ . Find the value of  $m$ .

*Jika  $3f(-1) + f(1) = -1$ . Cari nilai  $m$ .*

[3 marks]


[3 markah]

Answer / Jawapan:

(a) .

(b)

8



10




Diagram 4

Rajah 4

Diagram 4 shows an overview of the Theme Park containing various games. A Theme Park charges an entrance fee of RM45 and visitors have to pay an additional fee to play each game. The average money spent by 60 visitors shows an unreasonable value of RM25. The review found that the theme park counter staff made a mistake by deducting the additional fee with the entrance fee for the 60 visitors. Find the real average of the money spent by a visitor

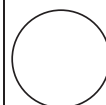
*Rajah 4 menunjukkan satu gambaran Taman Tema yang mengandungi pelbagai permainan. Sebuah Taman Tema mengenakan bayaran masuk sebanyak RM45 dan pengunjung perlu membuat bayaran tambahan bagi bermain setiap permainan. Purata wang yang dibelanjakan oleh 60 pengunjung menunjukkan nilai yang tidak munasabah iaitu RM25. Semakan semula mendapati bahawa pekerja kaunter Taman Tema tersebut melakukan kesilapan dengan menolak bayaran tambahan dengan yuran masuk bagi 60 pengunjung tersebut. Cari purata sebenar wang yang dibelanjakan oleh seorang pengunjung*

[4 marks]

[4 markah]

Answer / Jawapan:

10



11 | A bag contains 4 white marbles, 3 red marbles and 2 blue marbles that are all the same size.

*Sebuah beg mengandungi 4 biji guli putih, 3 biji guli merah dan 2 biji guli biru yang kesemuanya sama saiz.*

(a) If a marble is randomly removed from the bag, find the probability that the marble is not red.

*jika sebiji guli dikeluarkan secara rawak dari beg itu, Cari kebarangkalian guli tersebut bukan merah.*

(b) If the first marble removed is not re-inserted, then the second marble is removed. Calculate the probability that only 1 red marble is removed.

*guli pertama yang dikeluarkan tidak dimasukkan semula, seterusnya guli kedua dikeluarkan. Cari kebarangkalian hanya 1 guli merah dikeluarkan.*

[4 marks]


[4 markah]

Answer / Jawapan:

(a) .

(b)

11



- 12 (a) A squash team consisting of 4 men and 4 women is to be formed from 6 men and 7 women. Find the number of ways a selection can be made if 2 of the 7 women are inseparable

*Satu pasukan squasy yang terdiri daripada 4 lelaki dan 4 perempuan hendak dibentuk daripada 6 lelaki dan 7 perempuan. Cari bilangan cara pemilihan boleh dibuat jika 2 daripada 7 perempuan tersebut tidak boleh dipisahkan.*

- (b) 7 letters to be selected from UNCOPYRIGHTABLE to form a keyword. Find the number of passwords that can be formed if it must start and end with a vowel and the letter in the middle of the password must be a consonant.

*7 huruf hendak dipilih daripada UNCOPYRIGHTABLE untuk membentuk suatu kata kunci. Cari bilangan password yang dapat dibentuk sekiranya ianya mesti dimulai dan diakhiri dengan vokal dan huruf ditengah-tengah password mesti konsonan.*

[4 marks]


[4 markah]

Answer / Jawapan:

(a)

(b)

12





- 13 In a dart game exercise. The probability that Ramesh hits the target is  $p$ . Given the mean and standard deviation of success respectively is 18 and  $3\left(\sqrt{\frac{10}{7}}\right)$ . Find the value of  $p$ .

*Dalam satu latihan permainan dart. Kebarangkalian Ramesh mengenai tepat pada sasaran ialah  $p$ . Diberi min dan sisihan piawai kejayaan masing-masing ialah 18 dan*

*$3\left(\sqrt{\frac{10}{7}}\right)$ . Cari nilai  $p$ .*

[3 marks]

[3 markah]

Answer / Jawapan:


- 14 Given that vector  $\overline{PQ} = (k+2)x + 4y$ . If  $\overline{PQ}$  is extended to point R where  $\overline{QR} = hx + y$ . Express  $k$  in terms of  $h$ .

Diberi bahawa vektor  $\overline{PQ} = (k+2)x + 4y$ . Jika  $\overline{PQ}$  dipanjangkan kepada titik R dengan keadaan  $\overline{QR} = hx + y$ . Ungkapkan  $k$  dalam sebutan  $h$ .

[3 marks]  
[3 markah]

Answer / Jawapan:

14



- 15 Diagram 5 shows a sketch of a river with a width of 50 meters and the velocity of the current flowing downstream is  $2.5 \text{ ms}^{-1}$ .

Rajah 5 menunjukkan lakaran sebatang sungai dengan kelebarnya 50 meter dan halaju arus yang mengalir ke hilir ialah  $2.5 \text{ ms}^{-1}$

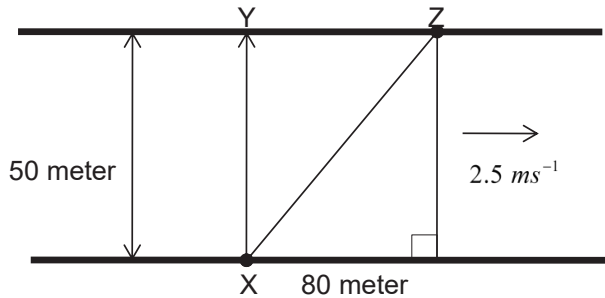


Diagram 5

Rajah 5


Ahmad wanted to paddle his boat from X to the other side of the river at Y but his boat was carried away by the current and stopped at Z in 12 seconds. Calculate the speed of Ahmad paddling his boat.

Ahmad ingin mendayung perahunya dari X ke seberang sungai di Y tetapi perahunya telah dibawa arus dan berhenti di Z dalam masa 12 saat. Hitung laju Ahmad mendayung perahunya.

[4 marks]  
[4 markah]

Answer / Jawapan:

15



- 16 Diagram 6 shows a straight line PQ extended to R. The equation of the PQ is

$$\frac{x}{h} - \frac{y}{k} = 1.$$

Rajah 6 menunjukkan garis lurus PQ yang disambungkan ke R. Persamaan garis PQ

adalah  $\frac{x}{h} - \frac{y}{k} = 1$ .

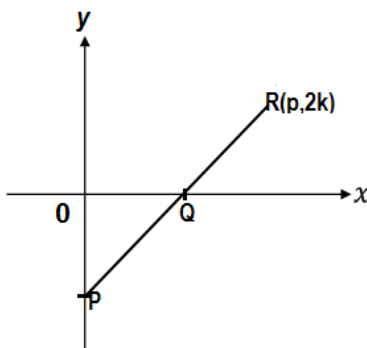


Diagram 6

Rajah 6

- (a) Find the gradient of PQ in term of  $h$  and  $k$ .  
*Cari kecerunan PQ dalam sebutan  $h$  dan  $k$ .*
- (b) Express  $h$  in term of  $p$   
*Ungkapkan  $h$  dalam sebutan  $p$*

[3 marks]  
[3 markah]

Answer / Jawapan:

(a)

(b)

16



17 Diagram 7 shows the curve  $y^2 = x + 4$  intersects the x-axis at A and the y-axis at B and C.

Rajah 7 menunjukkan lengkung bersilang pada paksi- x di A dan paksi-y di B dan C.

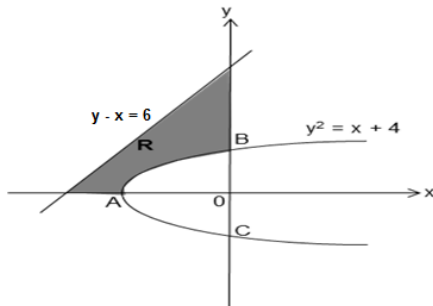


Diagram 7

Rajah 7


Find the volume of the shaded region R revolved through  $360^\circ$  about the y-axis.

Cari isipadu janaan kawasan berlorek R dikisarkan melalui  $360^\circ$  pada paksi-y

[3 marks]  
[3 markah]

Answer / Jawapan:

17



- 18 (a) Convert 0.1312 rad angle to degrees and minutes.

*Tukarkan sudut 0.1312 rad kepada darjah dan minit.*

- (b) Diagram 8 shows a semicircle centre at  $O$  with a diameter of  $2h$ . Given

$\angle XOY = \alpha \text{ rad}$  and arc  $XY = \frac{1}{4}h$ .

*Rajah 8 menunjukkan sebuah semi bulatan berpusat  $O$  dengan diameter adalah  $2h$ . Diberi  $\angle XOY = \alpha \text{ rad}$  dan lengkok  $XY = \frac{1}{4}h$ .*

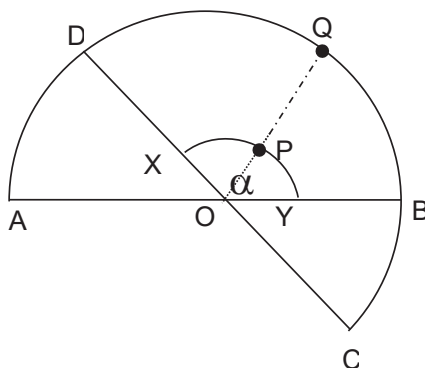


Diagram 8

Rajah 8

Find the length of  $PQ$  in term of  $\alpha$  and  $h$ .

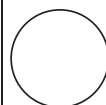
*Cari panjang  $PQ$  dalam sebutan  $\alpha$  dan  $h$ .*

[3 marks]  
[3 markah]

Answer / Jawapan:

(a)

(b)



19 Diagram 9 shows graph  $y = \sin 2x$  and  $y = \cos 2x$  intersect at two points.

Rajah 9 menunjukkan graf  $y = \sin 2x$  dan graf  $y = \cos 2x$  bersilang pada dua titik.

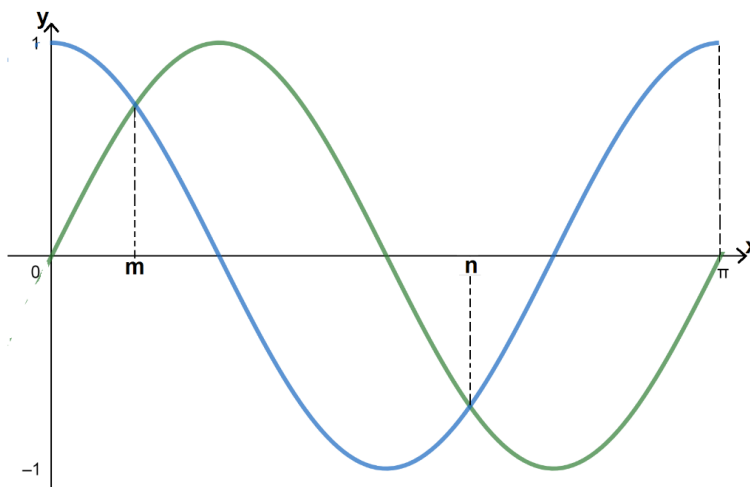


Diagram 9

Rajah 9


Find the value of  $m$  and of  $n$ .

Cari nilai  $m$  dan nilai  $n$ .

[3 marks]  
[3 markah]

Answer / Jawapan:

19



- 20 Diagram 10 shows point  $P(h,1)$  located at the circumference of a circle.  
Rajah 10 menunjukkan titik  $P(h,1)$  terletak pada lilitan bulatan

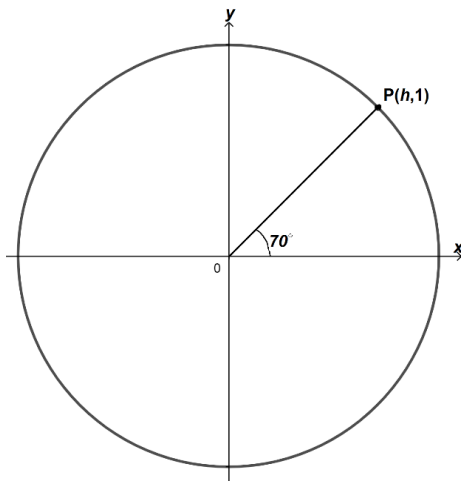


Diagram 10  
Rajah 10

Find, in term of  $h$ ,  
Cari dalam sebutan  $h$ ,

- (a)  $\cos 70^\circ$   
(b)  $\tan 140^\circ$

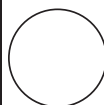
Answer / Jawapan:

(a)

(b)

[3 marks]  
[3 markah]

20





21

Given  $h = 3x - 2$  and  $k = x^2 - 1$ . Complete the information in the blank box provided.

Diberi  $h = 3x - 2$  dan  $k = x^2 - 1$ . Lengkapkan maklumat dalam kotak kosong yang disediakan.

[3 marks]


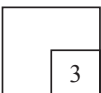
[3 markah]

Answer / Jawapan:

(a)  $\frac{dh}{dx} =$    $\frac{dk}{dx} =$

(b)  $\frac{dk}{dh} =$

21



- 22 Diagram 11 shows a box with a square base which has a total surface area of  $216 \text{ cm}^2$

*Rajah 11 menunjukkan sebuah kotak dengan tapak segi empat sama yang mempunyai jumlah luas permukaan  $216 \text{ cm}^2$ .*

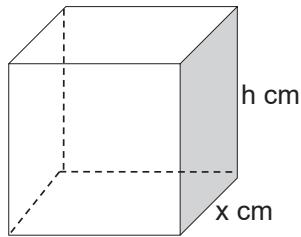


Diagram 11


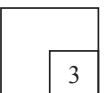
Rajah 11

Find the value of  $x$  that makes  $V$  maximum.

*Cari nilai  $x$  yang menjadikan  $V$  maksimum.*

[3 marks]  
[3 markah]

Answer / Jawapan:



23 Mr. Ramli is a small entrepreneur, he wants to invest RM 2000 in a spice business. He is confident that his investment, RM  $y$  will increase at a rate  $2(x + 121)$  which  $x$  is time in year.

*Encik Ramli merupakan seorang usahawan kecil-kecilan, beliau ingin melabur wang sebanyak RM 2000 dalam suatu perniagaan rempah ratus. Beliau berkeyakinan bahawa pelaburannya, RM  $y$  akan meningkat pada kadar  $2(x + 121)$  dengan  $x$  ialah masa dalam tahun.*


Find the number of years it takes for his investment money to be doubled from his original investment.

*Cari bilangan tahun yang diperlukan untuk wang pelaburan beliau itu menjadi dua kali ganda daripada pelaburan asalnya.*

[4 marks]  
[4 markah]

Answer / Jawapan:

23



24 Given  $\int_0^p q \, dx = \int_0^q (-p+1) \, dx$ .

Diberi bahawa  $\int_0^p q \, dx = \int_0^q (-p+1) \, dx$ .


Find the value of  $p$

Cari nilai  $p$ .

Answer / Jawapan:

[2 marks]  
[2 markah]

23



25 Figure 12 shows two firecrackers that were launched simultaneously and exploded at their maximum height. Firecracker 1 is represented by a function  $f(t) = -3t^2 + 24t$  and Firecracker 2 is represented by a function  $h(t) = -5t^2 + 20t$ , where  $f$  and  $h$  represents the height in the firecracker explosion in meter and  $t$  time in seconds after launch.

Rajah 12 menunjukkan dua batang mercun telah dilancarkan serentak dan meletup pada ketinggian maksimum masing-masing. Tembakan Mercun 1 diwakili oleh fungsi  $f(t) = -3t^2 + 24t$  dan tembakan mercun 2 diwakili oleh fungsi  $h(t) = -5t^2 + 20t$ , dimana  $f$  dan  $h$  mewakili tinggi dalam meter letupan bunga api itu dan  $t$  masa dalam saat selepas dilancarkan.

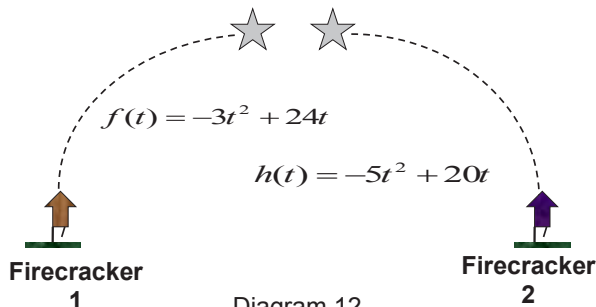


Diagram 12

Rajah 12

Did the two firecrackers explode at the same height? Give your reason.

Adakah kedua-dua mercun itu meletup pada ketinggian yang sama? Beri sebab anda.


[4 marks]

[4 markah]

25



Answer / Jawapan:



END OF QUESTION PAPER  
KERTAS PEPERIKSAAN TAMAT